



MATHEMATICS

CH: 4 - Long and Short

Name: _____

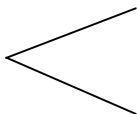
Date: _____

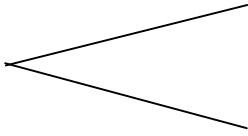
Class: III Sec: ____

1 Fill in the blanks

- 1) The standard unit for measuring length is _____
- 2) 1 m = _____ cm
- 3) 4 m = _____ cm
- 4) 8 m = _____ cm
- 5) 2 m 50 cm = _____ cm
- 6) 7 m 90 cm = _____ cm
- 7) 9m 10 cm = _____ cm
- 8) 500 cm = _____ m
- 9) 700 cm = _____ m
- 10) 850 cm = _____ m _____ cm

2 Estimate the lengths of the following objects and tick the right answer

1) Length of a blackboard  Less than 1 m
More than 1 m

2) Length of a cot  Less than 1 m
More than 1 m

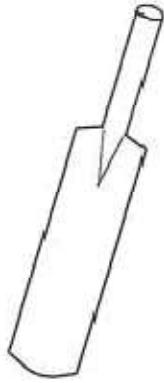


INDIAN SCHOOL NIZWA - WORKSHEET

3) Length of a pillow { Less than 1 m
More than 1 m

4) Length of a door { Less than 1 m
More than 1 m

3 Use a scale and measure the lengths of the following objects



_____ cm



_____ cm



_____ cm



_____ cm